



Right Vision Intl School Qaser Branch

DETAILED SYLLABUS FOR MID TERM – 2024/ 2025

Kg-2

English

Q1. Write Capital and small letters Aa - Zz

Q2. Write the "missing letters"

A a _____ C c _____ E e _____ G g _____ J j _____

M m _____ Q q _____ T t _____

X x _____


Q3. Make words.













Q4: How many Vowels are there?

Ans: _____

Q5: Name the Vowels Letters?

Ans: _____ .

Q6: What is your name ? (oral)

Q8: Circle the roots letters.

c	k	g	i
j	u	p	h
q	l	b	y

Q9: Write the sky letters.

b _ d _ f _ h _ k _ l _ t

Ans:

Q10: Use of "a or an"



___ book



___ ant



___ cat



___ apple



___ bow



___ girl



___ elephant



___ igloo



___ eye



___ kite











___ egg



___ octopus

Q11: Singular | plural.

Singular / Plural

cap		
carrot		
bird		
book		

Math

Q1: write the numbers from 1-50?

Q2: counting in words.

1 _____

6 _____

2 _____

7 _____

3 _____

8 _____

4 _____

9 _____

5 _____

10 _____

Q3: write the missing numbers 1 to 10 ?

1 _____ 3 _____ 5 _____ 7 _____ 9 _____.

Q4: Match the number with words.

3

8

5

2

Eight

Three

Two

Five

Q5: Write in words and numbers.

(Two are done for you)

2

Two

Four

4

7

Nine

3

One

10

Seven

Q6: What comes after.

5

23

29

18

9

13

Q7: What comes before.

37

48

17

45

8

25

Q8: What come between.

7

9

12

14

23

25

32

34

39

41

45

47

Q9: Subtraction.

$$\begin{array}{r} 9 \\ - 2 \\ \hline \end{array}$$

$$\begin{array}{r} 8 \\ - 2 \\ \hline \end{array}$$

$$\begin{array}{r} 5 \\ - 2 \\ \hline \end{array}$$

$$\begin{array}{r} 7 \\ - 5 \\ \hline \end{array}$$

$$\begin{array}{r} 6 \\ - 5 \\ \hline \end{array}$$

$$\begin{array}{r} 4 \\ - 2 \\ \hline \end{array}$$

$$\begin{array}{r} 9 \\ - 3 \\ \hline \end{array}$$

$$\begin{array}{r} 7 \\ - 2 \\ \hline \end{array}$$

$$\begin{array}{r} 6 \\ - 2 \\ \hline \end{array}$$

$$\begin{array}{r} 4 \\ - 3 \\ \hline \end{array}$$

$$\begin{array}{r} 8 \\ - 5 \\ \hline \end{array}$$

$$\begin{array}{r} 8 \\ - 5 \\ \hline \end{array}$$

$$\begin{array}{r} 9 \\ - 5 \\ \hline \end{array}$$

$$\begin{array}{r} 6 \\ - 4 \\ \hline \end{array}$$

$$\begin{array}{r} 8 \\ - 2 \\ \hline \end{array}$$

$$\begin{array}{r} 5 \\ - 4 \\ \hline \end{array}$$

Q10: Addition.

$$\begin{array}{r} 5 \\ + 2 \\ \hline \\ \hline \end{array}$$

$$\begin{array}{r} 3 \\ + 3 \\ \hline \\ \hline \end{array}$$

$$\begin{array}{r} 4 \\ + 3 \\ \hline \\ \hline \end{array}$$

$$\begin{array}{r} 2 \\ + 1 \\ \hline \\ \hline \end{array}$$

$$\begin{array}{r} 6 \\ + 2 \\ \hline \\ \hline \end{array}$$

$$\begin{array}{r} 5 \\ + 1 \\ \hline \\ \hline \end{array}$$

$$\begin{array}{r} 2 \\ + 3 \\ \hline \\ \hline \end{array}$$

$$\begin{array}{r} 4 \\ + 3 \\ \hline \\ \hline \end{array}$$

$$\begin{array}{r} 4 \\ + 1 \\ \hline \\ \hline \end{array}$$

$$\begin{array}{r} 5 \\ + 3 \\ \hline \\ \hline \end{array}$$

$$\begin{array}{r} 2 \\ + 7 \\ \hline \\ \hline \end{array}$$

$$\begin{array}{r} 4 \\ + 4 \\ \hline \\ \hline \end{array}$$

$$\begin{array}{r} 3 \\ + 2 \\ \hline \\ \hline \end{array}$$

$$\begin{array}{r} 2 \\ + 2 \\ \hline \\ \hline \end{array}$$

$$\begin{array}{r} 5 \\ + 4 \\ \hline \\ \hline \end{array}$$

$$\begin{array}{r} 5 \\ + 3 \\ \hline \\ \hline \end{array}$$

Q11: Solve these (Addition)

$$\begin{array}{r} 4 \\ + 3 \\ \hline \\ \hline \end{array}$$

$$\begin{array}{r} 2 \\ + 4 \\ \hline \\ \hline \end{array}$$

$$\begin{array}{r} 4 \\ + 1 \\ \hline \\ \hline \end{array}$$

$$\begin{array}{r} 7 \\ + 2 \\ \hline \\ \hline \end{array}$$

$$\begin{array}{r} 3 \\ + 5 \\ \hline \\ \hline \end{array}$$

$$\begin{array}{r} 5 \\ + 2 \\ \hline \\ \hline \end{array}$$

$$\begin{array}{r} 3 \\ + 6 \\ \hline \\ \hline \end{array}$$

$$\begin{array}{r} 7 \\ + 1 \\ \hline \\ \hline \end{array}$$

$$\begin{array}{r} 1 \\ + 2 \\ \hline \\ \hline \end{array}$$

$$\begin{array}{r} 2 \\ + 3 \\ \hline \\ \hline \end{array}$$

$$\begin{array}{r} 3 \\ + 4 \\ \hline \\ \hline \end{array}$$

$$\begin{array}{r} 3 \\ + 3 \\ \hline \\ \hline \end{array}$$

$$\begin{array}{r} 5 \\ + 1 \\ \hline \\ \hline \end{array}$$

$$\begin{array}{r} 4 \\ + 3 \\ \hline \\ \hline \end{array}$$

$$\begin{array}{r} 1 \\ + 8 \\ \hline \\ \hline \end{array}$$

$$\begin{array}{r} 5 \\ + 4 \\ \hline \\ \hline \end{array}$$

Q12: Solve these.

$$\begin{array}{r} 2 \\ -1 \\ \hline \\ \hline \end{array}$$

$$\begin{array}{r} 3 \\ -2 \\ \hline \\ \hline \end{array}$$

$$\begin{array}{r} 7 \\ -5 \\ \hline \\ \hline \end{array}$$

$$\begin{array}{r} 9 \\ -5 \\ \hline \\ \hline \end{array}$$

$$\begin{array}{r} 7 \\ -6 \\ \hline \\ \hline \end{array}$$

$$\begin{array}{r} 8 \\ -3 \\ \hline \\ \hline \end{array}$$

$$\begin{array}{r} 9 \\ -7 \\ \hline \\ \hline \end{array}$$

$$\begin{array}{r} 6 \\ -5 \\ \hline \\ \hline \end{array}$$

$$\begin{array}{r} 5 \\ -1 \\ \hline \\ \hline \end{array}$$

$$\begin{array}{r} 6 \\ -3 \\ \hline \\ \hline \end{array}$$

$$\begin{array}{r} 9 \\ -3 \\ \hline \\ \hline \end{array}$$

$$\begin{array}{r} 8 \\ -4 \\ \hline \\ \hline \end{array}$$


$$\begin{array}{r} 9 \\ -5 \\ \hline \\ \hline \end{array}$$

$$\begin{array}{r} 8 \\ -2 \\ \hline \\ \hline \end{array}$$

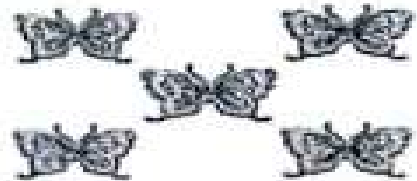
$$\begin{array}{r} 6 \\ -5 \\ \hline \\ \hline \end{array}$$

$$\begin{array}{r} 7 \\ -2 \\ \hline \\ \hline \end{array}$$


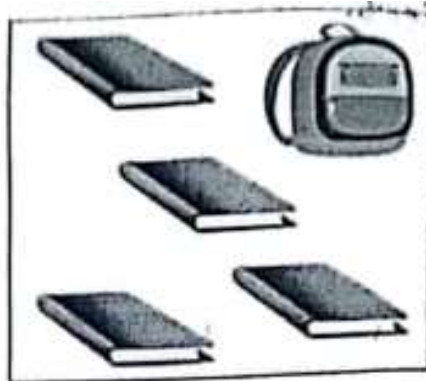

Q13: Write (H) on heavy and (L) on light objects.





Q14: Count and write.



Q15: Mark (✓) on same and (x) on different object.



Q16: Colour the bigger object in each set.



Q17: Mark (✓) the taller and (x) the shorter object in each set.



Science

Q1: What is your name ? (oral)

Q2: Tell the name of body parts? (oral)

Ans: Eyes, Nose, Teeth, Ear, Arm, Hand, Leg, Foot, Finger, Head.

Q3: How many senses do we have? (oral)

Ans: five senses

Q4: Name five senses? Oral

Ans: sight, hearing, taste, smell, touch

Q5: Tell some healthy habits. (oral)

Ans: 1. Take bath daily.

2. Brush your teeth.

3. Cut your nails.

Q6: Write the name of two living things ?

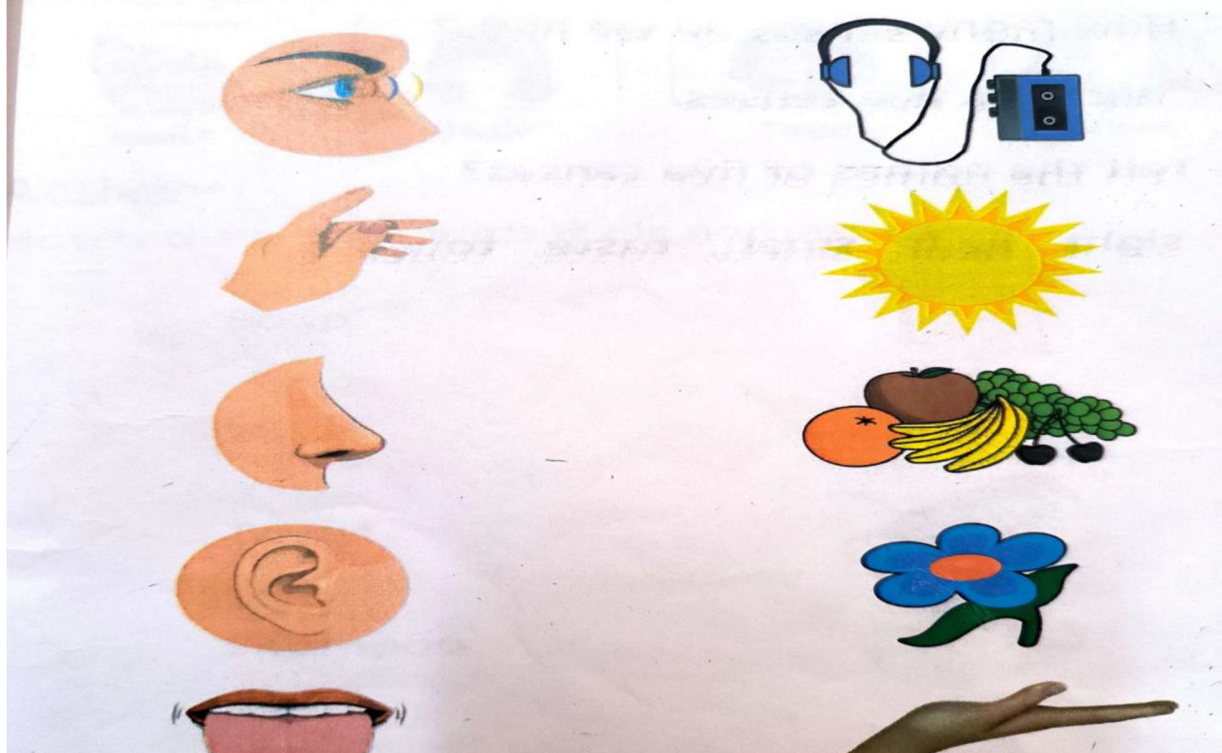
Ans: 1. _____ 2. _____.

Q7: Write the name of two non-living things?

Ans: 1. _____ 2. _____.


ACTIVITY :

Match these pictures to show their use.



Match the things with their names.


Soap



Comb



Towel



Shampoo



Tap




Activity

Write "W" for the wild animals and "T" for the tame animals.



Lion



Cow



Snake



Parrot



rabbit



duck

Write "Yes" or "No" _____ .

1. Cow is a wild animal.

2. Cat is a tame animal.

3. Birds fly in the air.

4. Fish cannot swim in the water.

5. Monkey can climb on the tree.

Activity

Encircle the birds and colour them.



Elephant




Owl



Giraffe



Parrot



Sparrow



Fish



Butterfly


Write the names of each part of the Plant, then color them.

Stem

Flower

Leaf

Roots



Activity

Encircle the things that we get from plants.




Orange



Onion




Milk



Cheese










Lady-finger



Mango

Activity

Tick (✓) the living things and (✗) the non living thing.



عربي

س1 وصل الحروف



أ
ب
ج
د

س2 ضع دائرة على الحرف المشابه


ء - ب - د - أ

د - ت - ث - ب

س3 رتب الحروف الهجائية الآتية مع كلمات الكلمة لكل حرف

د - ج - ح - خ - ب - ث - ت - أ

س4 اوجد حرف باء و لونه



س5 وصل الحروف المتشابهة مع بعض

ب

أ

ث

د

د

ب

أ

ت

س6 اقرأ الحروف الهجائية

أ - ج - ح - ء - ب - ت - خ - ث

القرآن الكريم

اختبار شفوي

س1 ماهي أركان الإسلام

س2 سورة الفاتحة

س3 سورة الإخلاص